

## Meten 13B



Liniaal



Potlood

**Eiland:** Berekenen van een omtrek

**Doel:** Berekenen van een omtrek met schaal via opmeten

**Opgave 1** Wat is de omtrek van de badkamer?

\_\_\_\_\_ m

**Opgave 2** Wat is de omtrek van de slaapkamer?

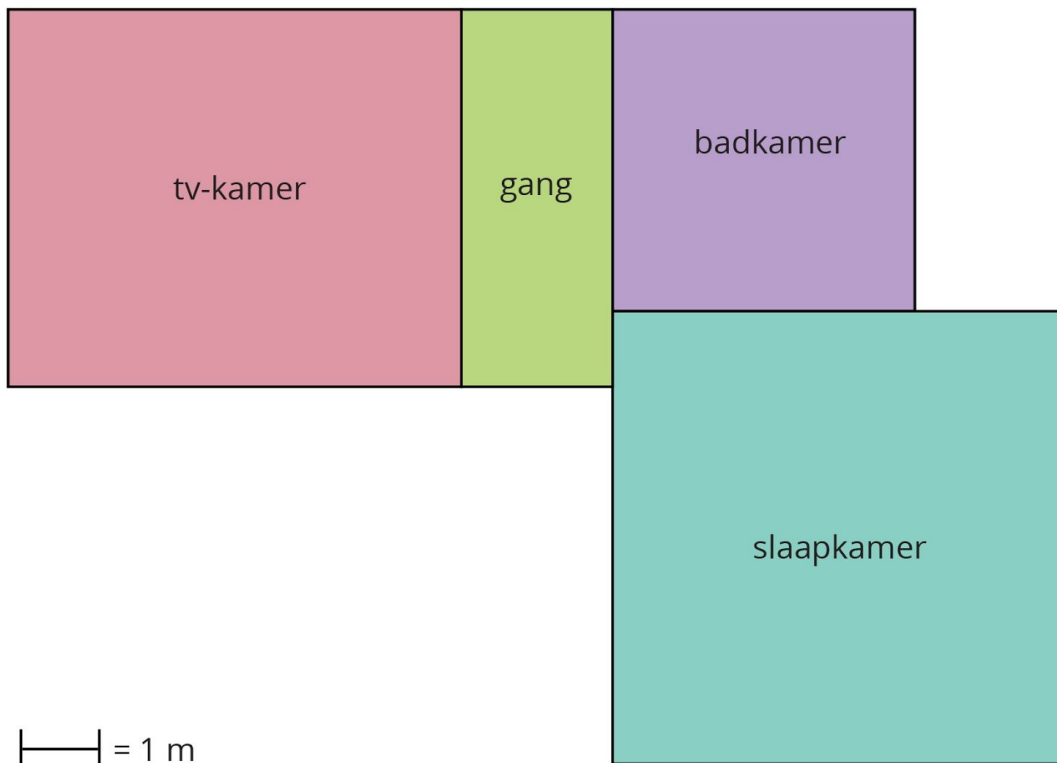
\_\_\_\_\_ m

**Opgave 3** Wat is de omtrek van de gang?

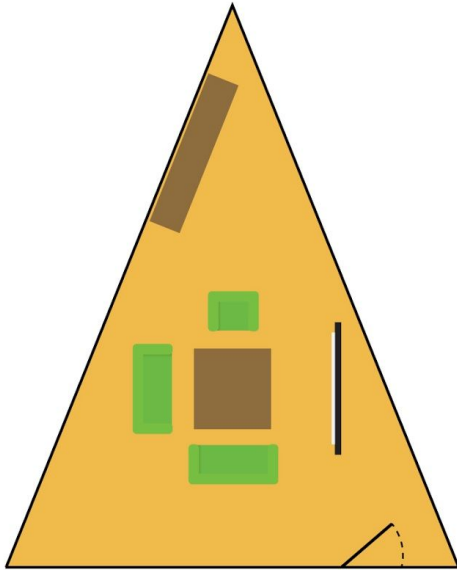
\_\_\_\_\_ m

**Opgave 4** Wat is de omtrek van de tv-kamer?

\_\_\_\_\_ m

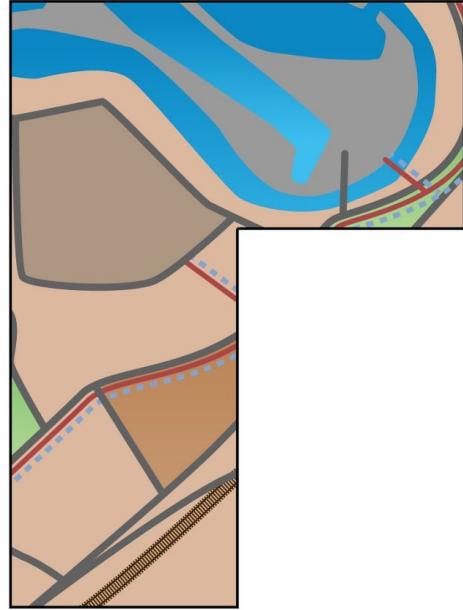


**Opgave 5** Wat is de omtrek? \_\_\_\_\_m



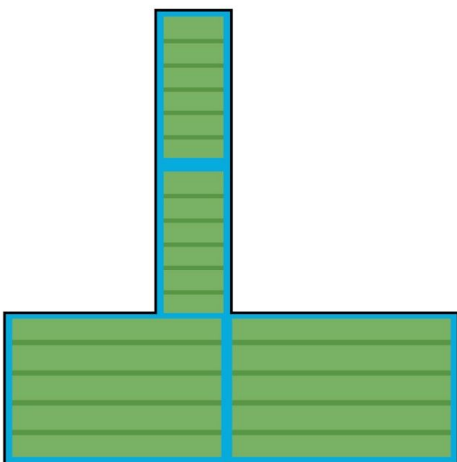
|—| = 2 m

**Opgave 6** Wat is de omtrek? \_\_\_\_\_km



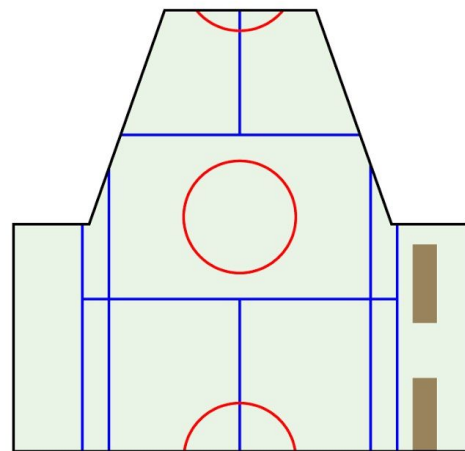
|—| = 2 km

**Opgave 7** Wat is de omtrek? \_\_\_\_\_km



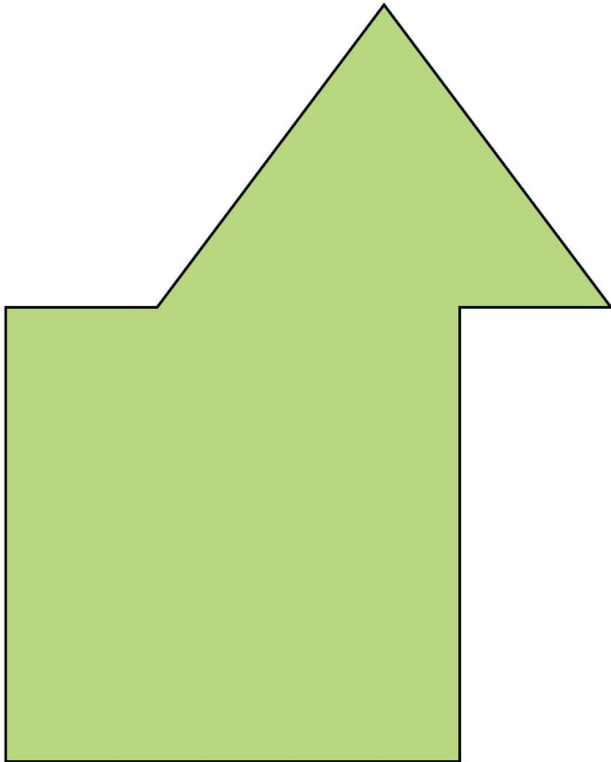
|—| = 2 km

**Opgave 8** Wat is de omtrek? \_\_\_\_\_m



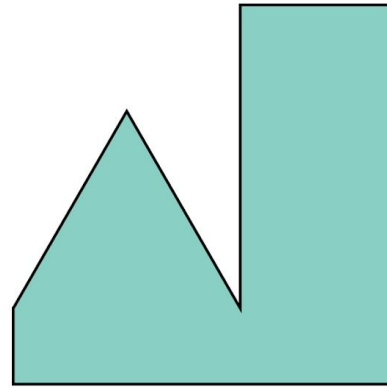
|—| = 2 m

Opgave 9 Wat is de omtrek? \_\_\_\_\_ km



|—| = 10 km

Opgave 10 Wat is de omtrek? \_\_\_\_\_ m



|—| = 2 m