


## Meten 7A


**Eiland:** Lengte met schaalverhouding  
**Doel:** Bepalen van schaal via opmeten



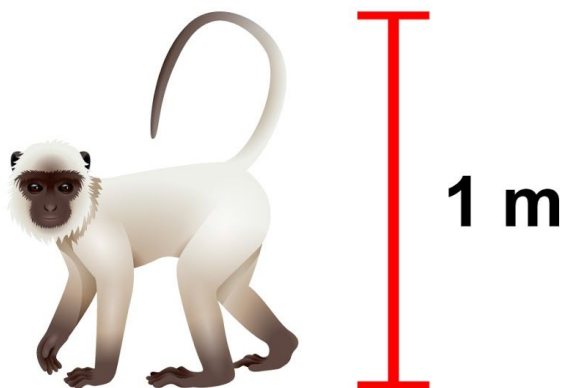
**Opgave 1** Wat is de schaal? 1 : \_\_\_\_\_



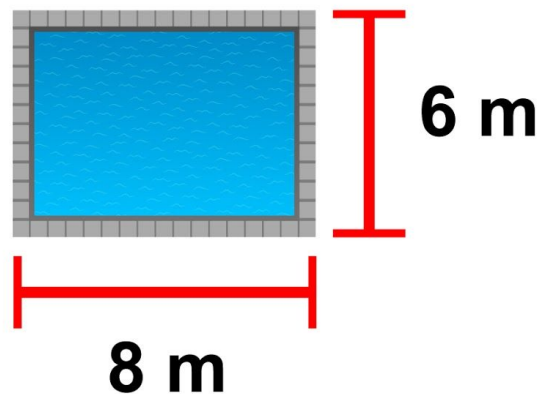
**Opgave 2** Wat is de schaal? 1 : \_\_\_\_\_



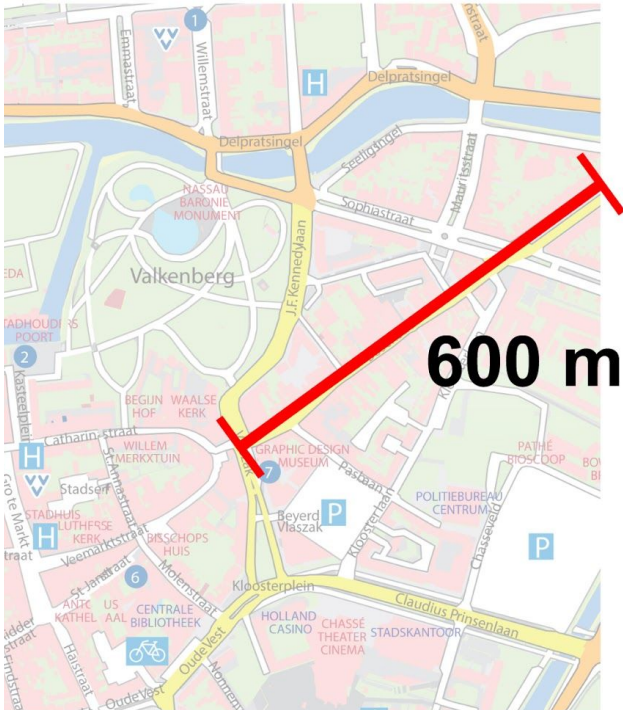
**Opgave 3** Wat is de schaal? 1 : \_\_\_\_\_



**Opgave 4** Wat is de schaal? 1 : \_\_\_\_\_



Opgave 5 Wat is de schaal? 1 : \_\_\_\_\_



Opgave 6 Wat is de schaal? 1 : \_\_\_\_\_



Opgave 7 Wat is de schaal? 1 : \_\_\_\_\_



Opgave 8 Wat is de schaal? 1 : \_\_\_\_\_

